

10POINTER
Your Study Companion

SSC CGL

Actual Paper

11th August, 2017
Shift - 1

SSC CGL 11th Aug 2017 Shift-1

REASONING

1 - In the following question, select the related word from the given alternatives.

Hockey : Stick :: Boxing : ?

Options:

- 1) Bat
- 2) Ball
- 3) Sword
- 4) Gloves

Correct Answer: Gloves

2 - In the following question, select the related letters from the given alternatives.

FS : LY :: IV : ?

Options:

- 1) GT
- 2) HS
- 3) IR
- 4) TZ

Correct Answer: GT

3 - In the following question, select the related number group from the given alternatives.

19 : 367 :: ? : ?

Options:

- 1) 21 : 447
- 2) 22 : 491
- 3) 29 : 850
- 4) 31 : 963

Correct Answer: 21 : 447

4 - In the following question, select the odd word from the given alternatives.

Options:

- 1) Sea
- 2) Ocean
- 3) Lake

4) Marsh

Correct Answer: Marsh

5 - In the following question, select the odd letter group from the given alternatives.

Options:

1) AJ

2) EN

3) NW

4) PW

Correct Answer: PW

6 - In the following question, select the odd number from the given alternatives.

Options:

1) 170

2) 290

3) 360

4) 530

Correct Answer: 360

7 - Arrange the given words in the sequence in which they occur in the dictionary.

1. Effacers

2. Effacing

3. Effaceable

4. Effacements

5. Effacement

Options:

1) 34125

2) 35412

3) 43152

4) 43215

Correct Answer: 35412

8 - A series is given with one term missing. Select the correct alternative from the given ones that will complete the series.

C11, V17, O23, ?

Options:

- 1) H30
- 2) H31
- 3) I29
- 4) I31

Correct Answer: H31

9 - In the following question, select the missing number from the given series.

19, 26, 45, 71, 116, ?

Options:

- 1) 166
- 2) 172
- 3) 184
- 4) 187

Correct Answer: 187

10 - Abhinav travels 10 km north then turns left. Then he travels 6 km and turns right and cover another 7 km. He finally turns to right and travels another 6 km. How far (in km) is he from the point of starting his journey?

Options:

- 1) 14
- 2) 16
- 3) 15
- 4) 17

Correct Answer: 17

11 - In the English alphabet, which letter is 13th from right end?

Options:

- 1) L
- 2) M
- 3) N
- 4) O

Correct Answer: N

12 - In the following question, from the given alternative words, select the word which cannot be formed using the letters of the given word.

HANDSOME

Options:

- 1) HATS
- 2) HOME
- 3) NAME
- 4) SAND

Correct Answer: HATS

13 - In a certain code language, "ACCOUNT" is written as "DFFRXQW". How is "MATHS" written in that code language?

Options:

- 1) PDWKV
- 2) PKLKP
- 3) PEWLU
- 4) PWDVK

Correct Answer: PDWKV

14 - If "-" means "divided by", "+" means "multiplied by", "÷" means "added to", "x" means "subtracted from", then

$$11 \div 6 - 2 + 5 \times 3 = ?$$

Options:

- 1) 17
- 2) 21
- 3) 23
- 4) 26

Correct Answer: 23

15 - If $3 \# 6 * 9 = 45$ and $9 \# 8 * 7 = 105$, then what is the value of $5 * 6 \# 3 = ?$

Options:

- 1) 14
- 2) 68
- 3) 86
- 4) 90

Correct Answer: 68

16 -

In the following question, select the number which can be placed at the sign of question mark (?) from the given alternatives.

निम्नलिखित प्रश्न में दिए गए विकल्पों में से प्रश्न चिह्न (?) के स्थान पर आने वाली संख्या को चुनिए।

336	170	748
523	78	349
431	?	328

Options:

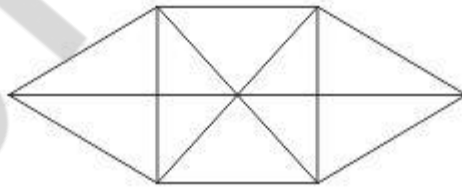
- 1) 33
- 2) 34
- 3) 36
- 4) 37

Correct Answer: 36

17 -

How many triangles are there in the given figure?

नीचे दी गई आकृति में कितने त्रिभुज हैं?



Options:

- 1) 16
- 2) 20
- 3) 22
- 4) 24

Correct Answer: 22

18 - In the following question below are given some statements followed by some conclusions. Taking the given statements to be true even if they seem to be at variance from commonly known facts, read all the conclusions and then decide which of the given conclusion logically follows the given statements.

Statements:

- I. All bags are tables.
- II. No table is red.

Conclusions:

- I. Some bags are red.
- II. All bags are red.

Options:

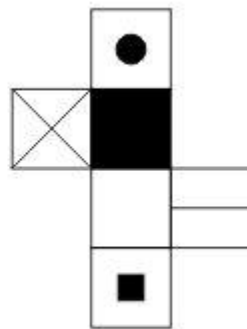
- 1) Only conclusion (I) follows.
- 2) Only conclusion (II) follows.
- 3) Neither conclusion (I) nor conclusion (II) follows.
- 4) Both conclusions follow.

Correct Answer: Neither conclusion (I) nor conclusion (II) follows.

19 -

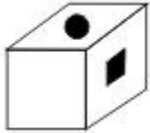
From the given options, which figure can be formed by folding the figure given in the question?

निम्नलिखित विकल्पों में से कौन सी उत्तर आकृति प्रश्न में दी गई आकृति को मोड़कर बनाई जा सकती है?



Options:

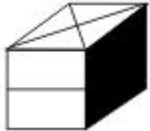
- 1)



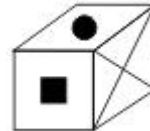
2)



3)



4)



Correct Answer:

20 - Identify the diagram that best represents the relationship among the given classes.

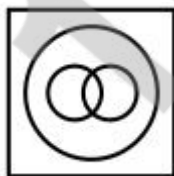
Bull, Animal, Carnivorous

Options:

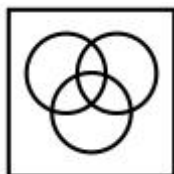
1)



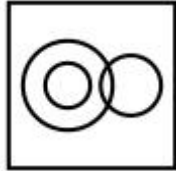
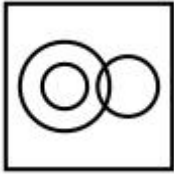
2)



3)



4)



Correct Answer:

21 -

Which answer figure will complete the pattern in the question figure?

कौन सी उत्तर आकृति प्रश्न आकृति के प्रतिरूप को पूरा करेगी?



Options:

1)



2)



3)



4)



Correct Answer:

22 -

From the given answer figures, select the one in which the question figure is hidden/embedded.

दी गई उत्तर आकृतियों में से उस उत्तर आकृति को चुनिए जिस में प्रश्न आकृति निहित है।



Options:

1)



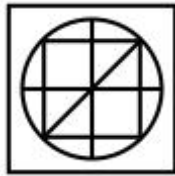
2)



3)



4)

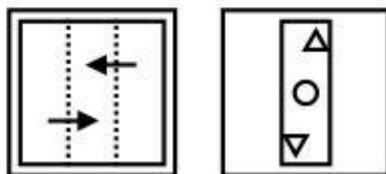


Correct Answer:

23 -

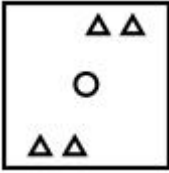
A piece of paper is folded and punched as shown below in the question figures. From the given answer figures, indicate how it will appear when opened?

नीचे के प्रश्न आकृतियों में दिखाए अनुसार कागज को मोड़कर छेदने तथा खोलने के बाद वह किस उत्तर आकृति जैसा दिखाई देगा?

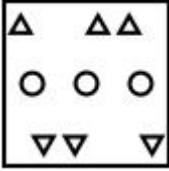


Options:

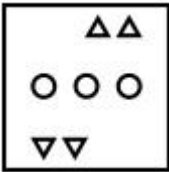
1)




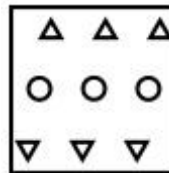
2)



3)



4)



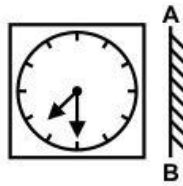
Correct Answer:

10POINTER

24 -


If a mirror is placed on the line AB, then which of the answer figure is the right image of the given figure?

यदि एक दर्पण को AB रेखा पर रखा जाए, तो दी गई उत्तर आकृतियों में से कौन सी आकृति प्रश्न आकृति की सही प्रतिबिम्ब होगी?




Options:

1)



2)



3)



4)



Correct Answer:

25 -

A word is represented by only one set of numbers as given in any one of the alternatives. The sets of numbers given in the alternatives are represented by two classes of alphabets as shown in the given two matrices. The columns and rows of **Matrix-I** are numbered from 0 to 4 and that of **Matrix-II** are numbered from 5 to 9. A letter from these matrices can be represented first by its row and next by its column, for example, 'P' can be represented by **02, 10**, etc., and 'G' can be represented by **66, 98**, etc. Similarly, you have to identify the set for the word "TRAIL".

एक शब्द केवल एक संख्या-समूह द्वारा दर्शाया गया है, जैसा कि विकल्पों में से किसी एक में दिया गया है। विकल्पों में दिए गए संख्या-समूह अक्षरों के दो वर्गों द्वारा दर्शाए गए हैं, जैसा कि नीचे दिए गए दो आव्यूहों में है। **आव्यूह-I** के स्तम्भ और पंक्ति की संख्या 0 से 4 दी गई है, और **आव्यूह-II** की 5 से 9। इन आव्यूहों से एक अक्षर को पहले उसकी पंक्ति और बाद में स्तम्भ संख्या द्वारा दर्शाया गया है। उदाहरण के लिए 'P' को **02, 10**, आदि द्वारा दर्शाया जा सकता है तथा 'G' को **66, 98**, आदि द्वारा दर्शाया जा सकता है। इसी तरह से आपको प्रश्न में दिए गए शब्द "TRAIL" के लिए समूह को पहचानना है।

Matrix-I						Matrix-II					
आव्यूह-I						आव्यूह-II					
	0	1	2	3	4		5	6	7	8	9
0	I	T	P	R	U	5	G	A	L	H	S
1	P	R	U	I	T	6	H	G	S	A	L
2	T	I	R	U	P	7	A	L	G	S	H
3	R	U	T	P	I	8	S	H	A	L	G
4	U	P	I	T	R	9	L	S	H	G	A

Options:

- 1) 01, 03, 75, 00, 68
- 2) 14, 30, 68, 13, 58
- 3) 20, 44, 99, 21, 96
- 4) 43, 11, 56, 34, 88

Correct Answer: 43, 11, 56, 34, 88

GENERAL AWARENESS

26 - Which of the following rate is charged by banks to their most credit worthy customers?

Options:

- 1) Prime Lending Rate
- 2) Statutory Liquidity Rate
- 3) Bank Rate
- 4) Repo Rate

Correct Answer: Prime Lending Rate

27 - Medium term loans are provided for a period of _____.

Options:

- 1) 1 year to 2 years
- 2) 15 months to 3 years
- 3) 15 months to 4 years
- 4) 1 year to 3 years

Correct Answer: 1 year to 3 years

28 - Which of the following is a feature of federal Government?

Options:

- 1) Supremacy of Parliament
- 2) Supremacy of Judiciary
- 3) Division of powers between federal and state Government
- 4) Single citizenship

Correct Answer: Division of powers between federal and state Government

29 - Under which article, President of India can proclaim financial emergency?

Options:

- 1) Article 32
- 2) Article 349
- 3) Article 360
- 4) Article 355

Correct Answer: Article 360

30 - Who was the founder of the Ghadar Party?

Options:

- 1) Basant Kumar Biswas
- 2) Sohan Singh Bhakna
- 3) Ram Prasad Bismil

4) Bhagat Singh

Correct Answer: Sohan Singh Bhakna

31 - In which year (in AD) was the East India Company established?

Options:

1) 1664

2) 1632

3) 1600

4) 1608

Correct Answer: 1600

32 - Himalayan mountain range falls under which type of mountains?

Options:

1) Block Mountain

2) Residual Mountain

3) Accumulated Mountain

4) Fold Mountain

Correct Answer: Fold Mountain

33 - 'Norwesters' are thunder storms which are prominent in _____.

Options:

1) India and Bhutan

2) Bhutan and Nepal

3) India and Bangladesh

4) Bangladesh and Myanmar

Correct Answer: India and Bangladesh

34 - UV rays coming from Sun, majorly causes which cancer?

Options:

1) Lungs cancer

2) Liver cancer

3) Mouth cancer

4) Skin cancer

Correct Answer: Skin cancer

35 - Which of the following is the largest mammal?

Options:

- 1) Whale
- 2) Rhinoceros
- 3) Elephant
- 4) Human

Correct Answer: Whale

36 - What is the full form of RNA?

Options:

- 1) Ribonucleic Acid
- 2) Ribonitric Acid
- 3) Ribonutrient Acid
- 4) Reverse Nucleic Acid

Correct Answer: Ribonucleic Acid

37 - At which of the following place, weight of an object is maximum?

Options:

- 1) At poles
- 2) At equator
- 3) At tropic of Capricorn
- 4) At tropic of cancer

Correct Answer: At poles

38 - What is the SI unit of temperature?

Options:

- 1) Kelvin
- 2) Joule
- 3) Celsius
- 4) Fahrenheit

Correct Answer: Kelvin

39 - Netscape Navigator is a _____.

Options:

- 1) graphical user interface
- 2) programming language
- 3) web browser
- 4) processor

Correct Answer: web browser

40 - What is nature of pH of Milk?

Options:

- 1) Slightly Acidic
- 2) Slightly Basic
- 3) Highly Acidic
- 4) Highly Basic

Correct Answer: Slightly Acidic

41 - Which among the following is not an example of emulsion?

Options:

- 1) Chocolate-Milk
- 2) Butter
- 3) Whipped Cream
- 4) Curd

Correct Answer: Curd

42 - Kyoto Protocol's (an international treaty to reduce greenhouse gas emissions) first meeting was held at which country?

Options:

- 1) USA
- 2) Germany
- 3) Japan
- 4) Switzerland

Correct Answer: Japan

43 - 'Lucky GrahakYojana' and 'DigiDhanVyaparYojana' to give cash awards to the customers and merchants was launched by which government body?

Options:

- 1) National Institution for Transforming India
- 2) National Payments Corporation of India
- 3) Financial Stability and Development Council
- 4) Reserve Bank of India

Correct Answer: National Institution for Transforming India

44 - Who among the following devised the technique IVF (In vitro Fertilization)?

Options:

- 1) Sir Frank Whittle
- 2) Robert Edwards
- 3) Edward Jenner
- 4) Dr. Martin Cooper

Correct Answer: Robert Edwards

45 - 'Wimbledon' is a place associated with which of the following sports?

Options:

- 1) Lawn tennis
- 2) Badminton
- 3) Hockey
- 4) Cricket

Correct Answer: Lawn tennis

46 -

Match the following.

निम्नलिखित का मिलान कीजिए।

Artist / कलाकार

1. Yamini Krishna Murthy
यामिनी कृष्णमूर्ति
2. M.S. Subbulakshmi
एम. एस. सुब्बुलक्ष्मी
3. Vishnu Diganbar Paluskar
विष्णु दिगंबर पलुस्कर
4. Pt. Shivkumar Shama
पंडित शिवकुमार शर्मा

Art / कला

- a. Vocalist
गायक
- b. Musician
संगीतकार
- c. Bharatnatyam
भरतनाट्यम
- d. Santoor
संतूर

Options:

- 1) 1-c, 2-a, 3-b, 4-d
- 2) 1-b, 2-a, 3-d, 4-c
- 3) 1-d, 2-c, 3-b, 4-a

4) 1-b, 2-c, 3-a, 4-d

Correct Answer: 1-c, 2-a, 3-b, 4-d

47 - Who is the recipient of Arjuna Award 2016 in the field of athletics?

Options:

- 1) VikasGowda
- 2) Lalita Babar
- 3) Neeraj Chopra
- 4) SeemaPunia

Correct Answer: Lalita Babar

48 - Six Machine (I Don't Like Cricket ... I Love It) is an autobiography of which famous batsman?

Options:

- 1) ViratKohli
- 2) AB De Velliers
- 3) Chris Gayle
- 4) TillakaratneDilshan

Correct Answer: Chris Gayle

49 - Which country is headed towards a confrontation over Gibraltar with Spain?

Options:

- 1) France
- 2) Morocco
- 3) Germany
- 4) United Kingdom

Correct Answer: United Kingdom

50 - Which country has banned 'Facebook' ?

Options:

- 1) China
- 2) Bhutan
- 3) Nepal
- 4) Pakistan

Correct Answer: China

QUANTITATIVE APTITUDE

51 - A fraction becomes $\frac{6}{5}$ when 5 is added to its numerator and becomes $\frac{1}{2}$ when 4 is added to its denominator. What will be the value of the fraction?

Options:

- 1) $\frac{8}{9}$
- 2) $\frac{7}{10}$
- 3) $\frac{7}{8}$
- 4) $\frac{6}{11}$

Correct Answer: $\frac{7}{10}$

52 - Amit can complete a work in 25 days and Punit can complete the same work in 20 days. Punit alone worked at it for 10 days and then left the work. In how many days will Amit alone complete the remaining work?

Options:

- 1)
 $11\frac{1}{2}$
- 2)
 $12\frac{1}{2}$
- 3)
 $13\frac{1}{2}$
- 4)
 $14\frac{3}{2}$

Correct Answer:

53 - The measure of the four successive angles of a quadrilateral are in the ratio 7 : 11 : 7 : 11. The quadrilateral is a _____.

Options:

- 1) trapezium

- 2) rectangle
- 3) parallelogram
- 4) square

Correct Answer: parallelogram

54 - What is the discount percentage offered on a book having marked price Rs 2150 being sold at Rs 1892?

Options:

- 1) 12
- 2) 13
- 3) 14
- 4) 16

Correct Answer: 12

55 - Rs 60500 is divided among A, B and C such that A receives $\frac{2}{9}$ as much as B and C together and B receives $\frac{3}{7}$ of as much as A and C together. What is the share of C (in Rs)?

Options:

- 1) 29850
- 2) 30120
- 3) 31350
- 4) 37250

Correct Answer: 31350

56 - The average age of a class of 6 girls is x years. Four new girls having ages $x - 2$, $x + 2$, $x + 4$ and $x + 6$ joins the class. What is the new average age (in years) of the class?

Options:

- 1) $x + 1$
- 2) $x + 2$
- 3) $2.5x$
- 4) $x + 2.5$

Correct Answer: $x + 1$

57 - A dealer sells two machines at Rs 12000 each. On one it gains 32% and on the other it loses 32%. What is its profit/loss percentage in the whole transaction?

Options:

- 1) No gain and no loss
- 2) 1% loss

- 3) 18% profit
- 4) 10.24% loss

Correct Answer: 10.24% loss

58 - How much water (in litres) must be added to 80 litres solution of milk and water containing 10% milk, so that it becomes a 5% milk solution?

Options:

- 1) 10
- 2) 20
- 3) 40
- 4) 80

Correct Answer: 80

59 - A bus travels $\frac{2}{5}$ of a total journey at its usual speed. The remaining distance was covered by bus at $\frac{6}{7}$ of its usual speed. Due to slow speed it reaches its destination 50 minutes late. If the total distance is 200 kms, then what is the usual speed (in km/hr) of bus?

Options:

- 1) 20.57
- 2) 24
- 3) 28
- 4) 26.52

Correct Answer: 24

60 - For an amount, simple interest at the rate of interest of 12% per annum for 6 years is Rs 25920. What will be the compound interest (in Rs) on same amount at the rate of interest of 8% per annum compounding annually for 2 years?

Options:

- 1) 4326.3
- 2) 5563.4
- 3) 5888.6
- 4) 5990.4

Correct Answer: 5990.4

61 - If α and β are roots of the equation $3x^2 - 13x + 14 = 0$, then what is the value of $(\alpha/\beta) + (\beta/\alpha)$?

Options:

- 1) 65/28

2) 53/14

3) 9

4) 85/42

Correct Answer: 85/42

62 - If $a + b + c = 9$ and $ab + bc + ca = 18$, then what is the value of $a^3 + b^3 + c^3 - 3abc$?

Options:

1) 189

2) 243

3) 361

4) 486

Correct Answer: 243

63 - If $(x/y) + (y/x) = 1$, then what is the value of $x^3 + y^3$?

Options:

1) - 1

2) 0

3) 1

4) 3

Correct Answer: 0

64 - If $5^x = 30^y = 6^z$, then what is the value of $(xy + yz + zx)/xyz$?

options:

1) 0

2) 1

3) 2

4) 3

Correct Answer: 0

65 - The internal bisectors of $\angle Q$ and $\angle R$ of triangle PQR meet at O. If $\angle P = 70^\circ$, then what is the measure of $\angle QOR$ (in degrees)?

Options:

1) 110

2) 115

3) 125

4) 135

Correct Answer: 125

66 - If the areas of two similar triangle are in the ratio 5 : 7, then what is the ratio of the corresponding sides of these two triangles?

Options:

- 1) 5 : 7
- 2) 25 : 49
- 3) $\sqrt{5} : \sqrt{7}$
- 4) 125 : 343

Correct Answer: $\sqrt{5} : \sqrt{7}$

67 - ABCD is an isosceles trapezium such that $AD \parallel BC$, $AB = 5$ cm, $AD = 8$ cm and $BC = 14$ cm. What is the area (in cm^2) of trapezium?

Options:

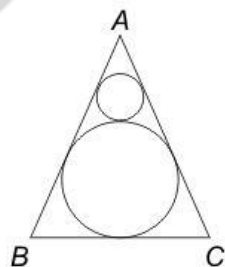
- 1) 36
- 2) 44
- 3) 88
- 4) 144

Correct Answer: 44

68 -

In the given figure, ABC is an equilateral triangle. If the area of bigger circle is 1386 cm^2 , then what is the area (in cm^2) of smaller circle?

दी गई आकृति में, ABC एक समबाहु त्रिभुज है। यदि बड़े वृत्त का क्षेत्रफल 1386 से.मी.^2 है, तो छोटे वृत्त का क्षेत्रफल (से.मी.² में) क्या है?



Options:

- 1) 144
- 2) 154
- 3) 288
- 4) 462

Correct Answer: 154

69 - What is the simplified value of $[(\tan^2 \theta - \sin^2 \theta)/\tan^2 \theta \sin^2 \theta]$?

Options:

- 1) -1
- 2) 0
- 3) 1
- 4) 2

Correct Answer: 1

70 - If $\sec(3x - 20^\circ) = \operatorname{cosec}(3y + 20^\circ)$, then what is the value of $\tan(x + y)$?

Options:

- 1) 1
- 2) $\sqrt{3}$
- 3) $1/\sqrt{3}$
- 4) $2\sqrt{3}$

Correct Answer: $1/\sqrt{3}$

71 - If $\cot A = n/(n + 1)$ and $\cot B = 1/(2n + 1)$, then what is the value of $\cot(A + B)$?

Options:

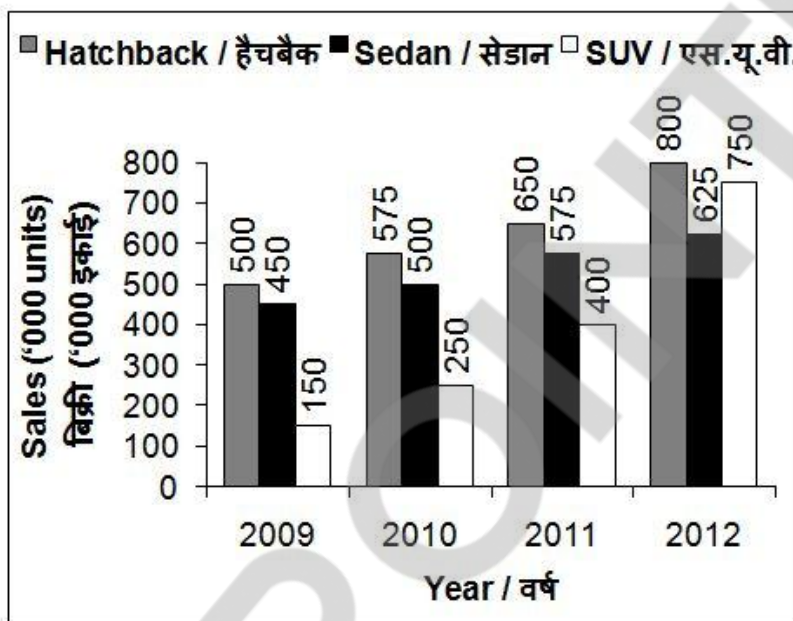
- 1) -1
- 2) 0
- 3) 1
- 4) 2

Correct Answer: -1

Direction for 72 to 75

The bar chart given below shows the sales of 3 types of cars in the Indian automotive industry over 4 years. All the sales figures have been shown in terms of '000 units.

नीचे दिए गए दण्ड चित्र में भारतीय मोटर उद्योग के 4 वर्षों में 3 प्रकार की कारों की बिक्री को दर्शाया गया है। बिक्री के सभी आँकड़ों को '000 इकाई के रूप में दर्शाया गया है।



72 -

Which of the following type of car has the highest increase in sales from 2009 to 2012?

Options:

- 1) Hatchback
- 2) Both SUV and Hatchback
- 3) SUV
- 4) Sedan

Correct Answer: SUV

73 -

What is the simple annual growth rate (in %) in the sales of SUV from 2009 to 2012?

options:

- 1) 90
- 2) 100
- 3) 133.33
- 4) 150

Correct Answer: 133.33

74 -

What is the respective ratio of total sales of Sedan and total sales of SUV over the period of 4 years ?

Options:

- 1) 23 : 31
- 2) 29 : 39
- 3) 43 : 31
- 4) 76 : 47

Correct Answer: 43 : 31

75 -

If all the 3 categories increase by same rate in 2013 over 2012 as they did in 2012 over 2011, then what will be the total approximate sales (in '000 units) of all the 3 categories taken together in year 2013 ?

options:

- 1) 2152
- 2) 2345
- 3) 3069
- 4) 3568

Correct Answer: 3069

English Comprehension

76 - In the following question, some part of the sentence may have errors. Find out which part of the sentence has an error and select the appropriate option. If a sentence is free from error, select 'No error'.

I was shocked to hear (1)/ that her husband (2)/ died of an accident. (3)/ No Error (4)

Options:

- 1) 1
- 2) 2
- 3) 3
- 4) 4

Correct Answer: 3

77 - In the following question, some part of the sentence may have errors. Find out which part of the sentence has an error and select the appropriate option. If a sentence is free from error, select 'No error'.

The reason for (1)/ his failure is because (2)/ he didn't study at all. (3)/ No Error (4)

Options:

- 1) 1
- 2) 2
- 3) 3
- 4) 4

Correct Answer: 2

78 - In the following question, the sentence given with blank to be filled in with an appropriate word. Select the correct alternative out of the four and indicate it by selecting the appropriate option.

ViratKohli added another feather _____ his cap by his wonderful performance in the one day match.

Options:

- 1) in
- 2) to
- 3) into
- 4) on

Correct Answer: to

79 - In the following question, the sentence given with blank to be filled in with an appropriate

word. Select the correct alternative out of the four and indicate it by selecting the appropriate option.

Only when _____ failed, the army resorted to force.

Options:

- 1) efforts
- 2) arrests
- 3) persuasions
- 4) manipulations

Correct Answer: persuasions

80 - In the following question, out of the four alternatives, select the word similar in meaning to the word given.

Pernicious

Options:

- 1) Beneficial
- 2) Dangerous
- 3) Innocuous
- 4) Advantageous

Correct Answer: Dangerous

81 - In the following question, out of the four alternatives, select the word similar in meaning to the word given.

Stringent

Options:

- 1) Annoying
- 2) Revengeful
- 3) Incidental
- 4) Rigorous

Correct Answer: Rigorous

82 - In the following question, out of the four alternatives, select the word opposite in meaning to the word given.

Vexatious

Options:

- 1) Calamitous
- 2) Treachery
- 3) Soothing
- 4) Pliable

Correct Answer: Soothing

83 - In the following question, out of the four alternatives, select the word opposite in meaning to the word given.

Burgeon

Options:

- 1) Bolster
- 2) Shivel
- 3) Mount
- 4) Amplify

Correct Answer: Shivel

84 - In the following question, out of the four alternatives, select the alternative which best expresses the meaning of the idiom/Phrase.

Live from hand to mouth

Options:

- 1) Filthy rich people
- 2) To be dependent on others
- 3) To have enough money to live on and nothing extra
- 4) Living in miserable conditions.

Correct Answer: To have enough money to live on and nothing extra

85 - In the following question, out of the four alternatives, select the alternative which best expresses the meaning of the idiom/Phrase.

To face the music

Options:

- 1) To bear the consequences
- 2) To disparage someone
- 3) To be hard of hearing
- 4) To enjoy a musical concert

Correct Answer: To bear the consequences

86 - Improve the bracketed part of the sentence.

He thanked me for what I (have done) for his wife.

Options:

- 1) had done
- 2) had been done
- 3) have been done
- 4) No improvement

Correct Answer: had done

87 - Improve the bracketed part of the sentence.

(Hardly nothing) was offered to the victims of the earthquake.

Options:

- 1) Hardly something
- 2) Hardly anything
- 3) Hardly little
- 4) No improvement

Correct Answer: Hardly anything

88 - In the following question, out of the four alternatives, select the alternative which is the best substitute of the phrase.

Killing of one's own child

Options:

- 1) Foeticide
- 2) Filicide
- 3) Infanticide
- 4) Lupicide

Correct Answer: Filicide

89 - In the following question, out of the four alternatives, select the alternative which is the best substitute of the phrase.

A lover of work

Options:

- 1) Oenophile
- 2) Technophile
- 3) Romanophile
- 4) Ergophile

Correct Answer: Ergophile

90 - In the following question, four words are given out of which one word is incorrectly spelt. Find the incorrectly spelt word.

Options:

- 1) Impression
- 2) Personnal
- 3) Terrorism
- 4) Illiterate

Correct Answer: Personnal

91 - In the following question, four words are given out of which one word is incorrectly spelt. Find the incorrectly spelt word.

Options:

- 1) Stupefaction
- 2) Preferential
- 3) Surveillance
- 4) Detrimental

Correct Answer: Surveillance

92 - The question below consists of a set of labelled sentences. Out of the four options given, select the most logical order of the sentences to form a coherent paragraph.

P: It has been the handmaid of the ruling class.

Q: Therefore, ever since the dawn of civilization, persons in power have always tried to supervise or control education.

R: Education is an instrument which imparts knowledge and therefore, indirectly controls power.

S: It is an old saying that knowledge is power.

Options:

- 1) SQPR
- 2) PRQS
- 3) SRQP
- 4) PSQR

Correct Answer: SRQP

93 - The question below consists of a set of labelled sentences. Out of the four options given, select the most logical order of the sentences to form a coherent paragraph.

P: This is despite the fact that there is a rampant migration of rural families to urban centres.

Q: Generally the gains of being a unit of the urban population are less than the disadvantages and risks that are inbuilt in the urban life.

R: Rural population still dominates the urban population as far as the number is considered.

S: India is a country of villages.

Options:

- 1) QRSP
- 2) RPQS
- 3) SRQP
- 4) QPRS

Correct Answer: SRQP

94 - In the following question, a sentence has been given in Active/Passive voice. Out of four alternatives suggested, select the one which best expresses the same sentence in Passive/Active voice.

The residents celebrated Diwali.

Options:

- 1) Celebration of Diwali was done by the residents.
- 2) Diwali has been celebrated by the residents.
- 3) Diwali was celebrated by the residents.
- 4) Diwali is celebrated by the residents.

Correct Answer: Diwali was celebrated by the residents.

95 - In the following question, a sentence has been given in Direct/Indirect speech. Out of the four alternatives suggested, select the one which best expresses the same sentence in Indirect/Direct speech.

The foreman said to his workers "I cannot pay you higher wages."

Options:

- 1) The foreman warned his workers that he cannot pay them higher wages.
- 2) The foreman told his workers that he could not pay them higher wages.
- 3) The foreman told his workers that they could not be paid higher wages.
- 4) The foreman forbid his workers to pay higher wages.

Correct Answer: The foreman told his workers that he could not pay them higher wages.

Direction for 96 to 100

In the following passage some of the words have been left out. Read the passage carefully and select the correct answer for the given blank out of the four alternatives.

It is not _____ to ignore all allegations of booth capturing and rigging as murmurs of _____ losers. _____ have come to light of intimidation of whole villages and communities to make them vote for a particular candidate or party. At times election officials have been _____ by unscrupulous politicians into turning a blind eye to _____ practices.

96 -

Options:

- 1) realistic
- 2) reliable
- 3) required
- 4) essential

Correct Answer: realistic

97 -

Options:

- 1) rational
- 2) disgruntled
- 3) huge
- 4) idealist

Correct Answer: disgruntled

98

Options:

- 1) instances
- 2) sources
- 3) reasons
- 4) Ideas

Correct Answer: instances

99 -

Options:

- 1) decided
- 2) safeguarded
- 3) rejuvenated
- 4) threatened

Correct Answer: threatened

100 -

Options:

- 1) significant
- 2) rare
- 3) unjust
- 4) usual

Correct Answer: unjust